


# Points, Lines, and Planes

Here are some important geometric terms.

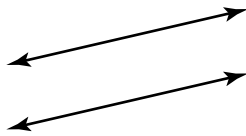


**Point**

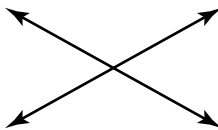
A point is an exact location in space.  
This is point X.

**Line**

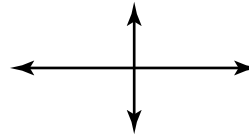
A line is a straight path of points that goes on and on in both directions.  
This is line AB.



**Parallel lines**  
Parallel lines never intersect.



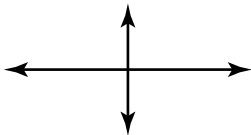
**Intersecting lines**  
Intersecting lines pass through the same point.



**Perpendicular lines**  
Perpendicular lines form right angles.

Use geometric terms to describe what is shown. Be as specific as possible.

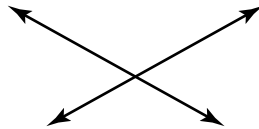
1.



\_\_\_\_\_

\_\_\_\_\_


2.



\_\_\_\_\_

\_\_\_\_\_

3.



\_\_\_\_\_

\_\_\_\_\_

4. Name three different lines.

\_\_\_\_\_

5. Name a set of parallel lines.

\_\_\_\_\_

